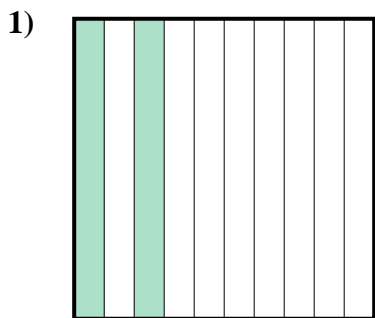





Determine which letter best represents the amount shaded of the whole.

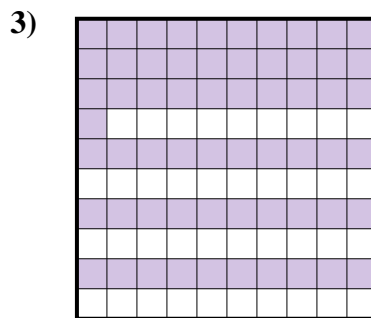
Answers



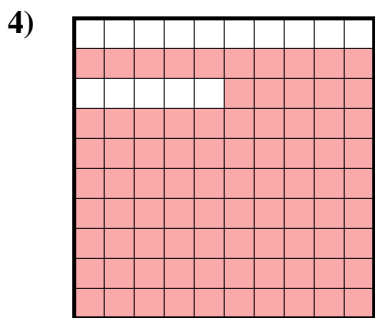
- A. 0.2
- B. 200.00
- C. 200.0
- D. 2



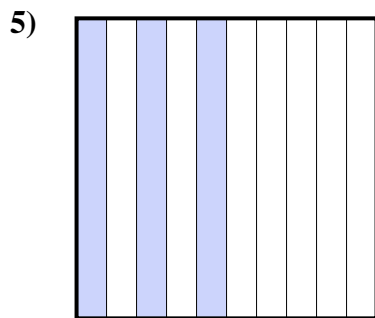
- A. 5
- B. 500.00
- C. 50
- D. 0.5



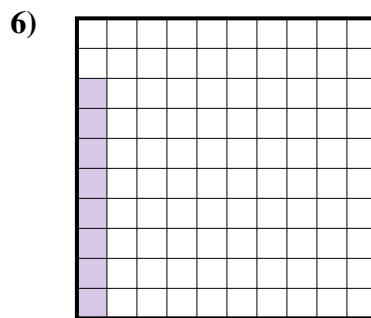
- A. 610.00
- B. 0.061
- C. 0.61
- D. 61



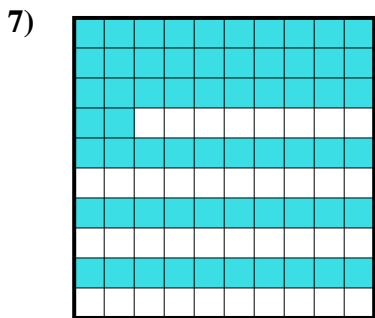
- A. 85
- B. 850.00
- C. 0.085
- D. 0.85



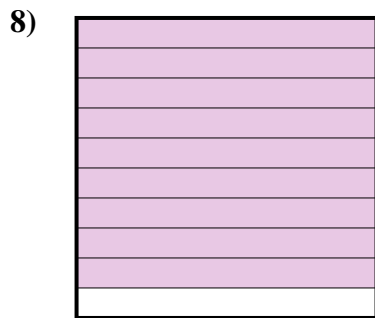
- A. 300.00
- B. 300.0
- C. 0.03
- D. 0.3



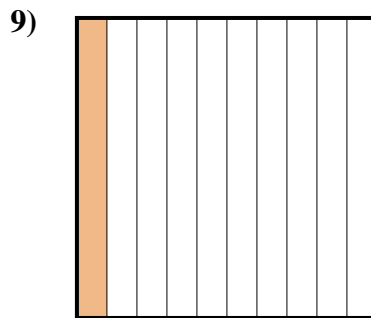
- A. 8
- B. 80.00
- C. 80.0
- D. 0.08



- A. 6.2
- B. 620.00
- C. 0.62
- D. 62



- A. 9
- B. 0.9
- C. 90
- D. 900.0



- A. 100.0
- B. 10
- C. 0.1
- D. 1

1. _____

2. _____

3. _____

4. _____

5. _____

6. _____

7. _____

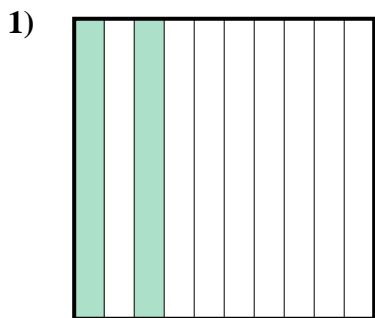
8. _____

9. _____




Determine which letter best represents the amount shaded of the whole.

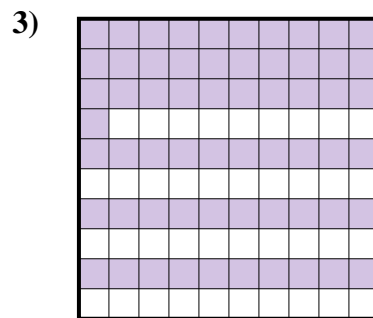
Answers



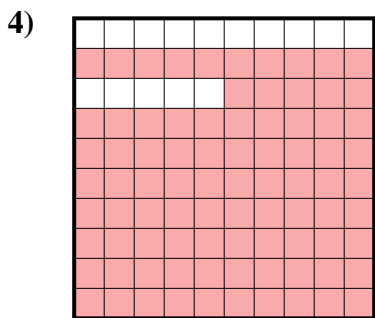
- A. 0.2
- B. 200.00
- C. 200.0
- D. 2



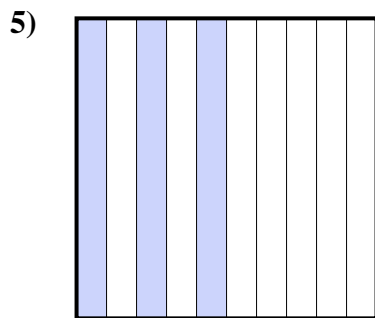
- A. 5
- B. 500.00
- C. 50
- D. 0.5



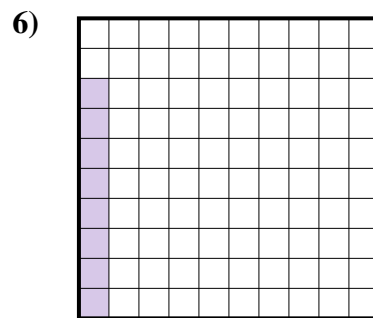
- A. 610.00
- B. 0.061
- C. 0.61
- D. 61



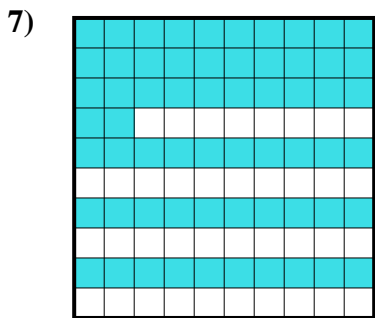
- A. 85
- B. 850.00
- C. 0.085
- D. 0.85



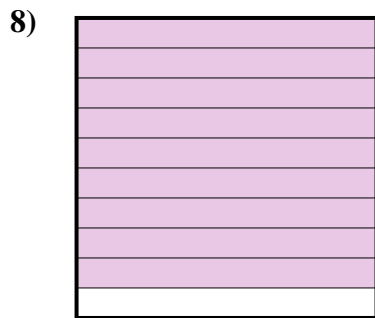
- A. 300.00
- B. 300.0
- C. 0.03
- D. 0.3



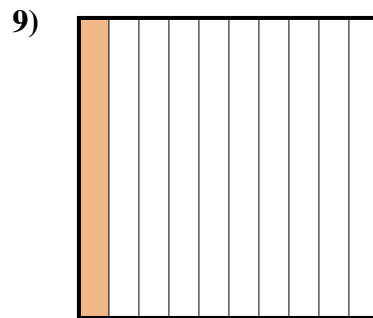
- A. 8
- B. 80.00
- C. 80.0
- D. 0.08



- A. 6.2
- B. 620.00
- C. 0.62
- D. 62



- A. 9
- B. 0.9
- C. 90
- D. 900.0



- A. 100.0
- B. 10
- C. 0.1
- D. 1

- 1. **A**
- 2. **D**
- 3. **C**
- 4. **D**
- 5. **D**
- 6. **D**
- 7. **C**
- 8. **B**
- 9. **C**